


July

Week 1



3rd Grade


Sunday



Fact
of the
Week



The heart is a remarkable organ. It can pump 5 quarts of blood every minute. It pumps about 70 times a minute and about 100,000 times every day.



Monday

Monday



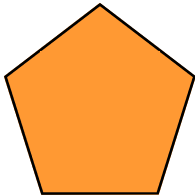
$$\begin{array}{r} .52 \\ + .28 \\ \hline \end{array} \qquad \begin{array}{r} 71 \\ - 34 \\ \hline \end{array}$$

The number has a 5 in the hundreds place. The tens place has 3 more than the hundreds place. The ones are the same as the tens. What is the number?




Tuesday

Tuesday




$$\begin{array}{r} .35 \\ + .08 \\ \hline \end{array} \qquad \begin{array}{r} 34 \\ - 19 \\ \hline \end{array}$$

There are 4 ponds. There are 4 ducks in each pond. How many ducks are there? _____




Wednesday

Wednesday



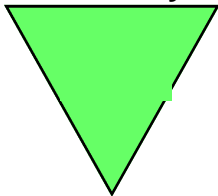
$$\begin{array}{r} 15 \\ - 9 \\ \hline \end{array} \qquad \begin{array}{r} 10 \\ + 3 \\ \hline \end{array}$$

There were 13 sea lions on the beach. Later, 4 sea lions swam away. How many sea lions were there? _____



Thursday

Thursday




$$\begin{array}{r} 46 \\ + 44 \\ \hline \end{array} \qquad \begin{array}{r} 64 \\ - 17 \\ \hline \end{array}$$

Jimmy had 12 baseball cards. Chris had 10. If they put their cards together, How many would they have? _____




Friday

Friday




$$\begin{array}{r} 91 \\ + 21 \\ \hline \end{array} \qquad \begin{array}{r} 46 \\ - 11 \\ \hline \end{array}$$

Marissa can read 20 pages in 15 minutes. How many pages can she read in 45 minutes? _____



Saturday

Saturday




Summer
Safety
Tip

Wear a sunscreen to protect your skin when outside on sunny summer days




July

Week 2



3rd Grade

Sunday




Fact of the Week



July 4th celebrates the signing of the Declaration of Independence.



Monday



Monday

$$\begin{array}{r} 25 \\ +48 \\ \hline \end{array}$$

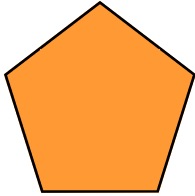
$$\begin{array}{r} 50 \\ -24 \\ \hline \end{array}$$

Asa lost 7 teeth on top and 8 teeth on the bottom. Ring the number sentence that shows how many teeth Asa lost.

8-1=7 8-7=1 7+8=15 7+1=8



Tuesday




Tuesday


$$\begin{array}{r} 48 \\ +32 \\ \hline \end{array}$$

$$\begin{array}{r} 91 \\ -36 \\ \hline \end{array}$$

Tommy has 54 Flyers hockey cards. Christian has 28 hockey cards. How many cards do they have? _____



Wednesday




Wednesday

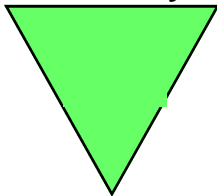
$$\begin{array}{r} 17 \\ +54 \\ \hline \end{array}$$

$$\begin{array}{r} 50 \\ -31 \\ \hline \end{array}$$

Jessie has 8 dimes and 2 nickels. How much money does she have? _____



Thursday




Thursday


$$\begin{array}{r} 56 \\ +47 \\ \hline \end{array}$$

$$\begin{array}{r} 82 \\ +28 \\ \hline \end{array}$$

There are 10 pieces of candy. There are 5 children. How many pieces of candy will each child get? _____



Friday





Friday


$$\begin{array}{r} 94 \\ -16 \\ \hline \end{array}$$

$$\begin{array}{r} 85 \\ -55 \\ \hline \end{array}$$

Which plane figure is on the face of the solid shape? Draw it here.



Saturday




Saturday

What Random-Act-of-Kindness were you involved in this week?




July

Week 3



3rd Grade

Sunday



Fact of the Week



July 14th is Bastille Day in France which in 1789 signaled the beginning of the French Revolution. It is celebrated with parades, flags, and fireworks.




Monday



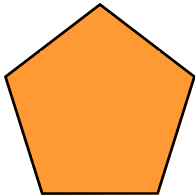
Monday

$$\begin{array}{r} 28 \\ + 29 \\ \hline \end{array} \qquad \begin{array}{r} .60 \\ - .35 \\ \hline \end{array}$$

Ashley and Kate compared the money they had in their piggy banks. Ashley had 2 half dollars and 3 quarters. Kate had 3 half dollars and a dime. Who had more money? _____



Tuesday




Tuesday

$$\begin{array}{r} 33 \\ + 49 \\ \hline \end{array} \qquad \begin{array}{r} 74 \\ - 27 \\ \hline \end{array}$$

Susan read 12 books. Natasha read 8 more than Susan. How many did she read? _____



Wednesday



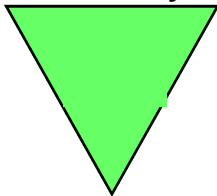
Wednesday

$$\begin{array}{r} 10 \\ + 90 \\ \hline \end{array} \qquad \begin{array}{r} .99 \\ - .35 \\ \hline \end{array}$$

Caroline and Augusta shared a chicken pie. Caroline ate 1/4 of the pie. Augusta ate 2/4. How much pie was left? _____




Thursday




Thursday

$$\begin{array}{r} 36 \\ + 44 \\ \hline \end{array} \qquad \begin{array}{r} .50 \\ + .25 \\ \hline \end{array}$$

There are 25 pieces of candy. There are 5 children. How many pieces of candy will each child get? _____





Friday




Friday

$$\begin{array}{r} 91 \\ - 18 \\ \hline \end{array} \qquad \begin{array}{r} 85 \\ - 58 \\ \hline \end{array}$$

Which plane figure is on the face of the solid shape? Draw it here.



Saturday




Saturday

What Random-Act-of-Kindness were you involved in this week?



Journal Entries:



Week 3

Summer is often a time for “day trips” to places such as Great Adventure, Sesame Place, the shore, the zoo, or a museum.

Create a postcard of the place you visited. Write a message to a friend telling about something you saw or did.

Book Corner:

Write an original sentence for your 2 new words.


What page are you on?

Challenge Corner:

In the northern hemisphere it's summer-time. But in the southern hemisphere it's winter. List 4 countries that are having winter right now.


July

Week 4



3rd Grade

Sunday



Fact
of the
Week



The Olympic motto: CITIUS, ALTIUS, FORTIUS
means
SWIFTER, HIGHER, STRONGER.



Monday



Monday

What is the perimeter in centimeters?

5 cm

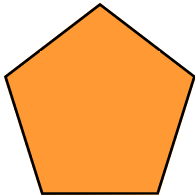
$$\begin{array}{r} .49 \\ + .20 \\ \hline \end{array}$$

$$\begin{array}{r} 93 \\ - 54 \\ \hline \end{array}$$

2 cm



Tuesday



Tuesday


Andrew has 15 baseball cards. Justin has 7 more than Andrew. How many does Justin have?

$$\begin{array}{r} 33 \\ + 37 \\ \hline \end{array}$$

$$\begin{array}{r} .42 \\ - .08 \\ \hline \end{array}$$



Wednesday



Wednesday

Ring the one that weighs less than a pound.

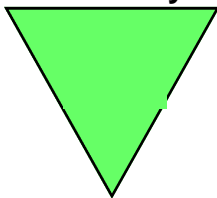
$$\begin{array}{r} 12 \\ + 74 \\ \hline \end{array}$$

$$\begin{array}{r} 26 \\ - 19 \\ \hline \end{array}$$

a picnic table
a hot dog
a watermelon



Thursday



Thursday


Charles read for half an hour. He started reading at 10 o'clock. What time did he stop?

$$\begin{array}{r} 25 \\ + 46 \\ \hline \end{array}$$

$$\begin{array}{r} 46 \\ - 27 \\ \hline \end{array}$$



Friday



Friday


Jordan buys an eraser for .34. He gives the clerk a half dollar. How much change does he get?

$$\begin{array}{r} 57 \\ + 16 \\ \hline \end{array}$$

$$\begin{array}{r} 83 \\ - 69 \\ \hline \end{array}$$



Saturday




Saturday

What Random-Act-of-Kindness were you involved in this week?



Journal Entries:



Week 4

You just heard a really awful commercial for the new swimming goggles that you bought. Write a replacement for this commercial—one that's destined to make sales soar! (Write the commercial on the back of this page.) Swimming is an activity everyone enjoys in the summer. Alphabetize each of the lists below.

starfish
shark
sand

diving
dolphin
danger

bluefish
boat
breathe

List 1

List 2

List 3

Book Corner:


Now that you have completed reading your first novel, turn to the suggested activity page and do the assignment.

Challenge Corner:

Pretend you have been asked to interview a lifeguard at the beach. Write 5 questions you would ask this person.


July

Week 5



3rd Grade

Sunday



Fact of the Week



There are seven continents in the world. Name them.




Monday



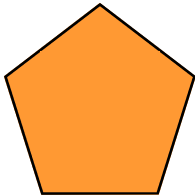
Monday

$$\begin{array}{r} 24 \\ 48 \\ + 22 \\ \hline \end{array} \quad \begin{array}{r} 896 \\ - 653 \\ \hline \end{array}$$

Emily has 5 dimes, 3 nickels and 2 pennies. Could she buy a beanie baby for 74¢? _____



Tuesday




Tuesday

$$\begin{array}{r} 560 \\ - 148 \\ \hline \end{array} \quad \begin{array}{r} 763 \\ + 15 \\ \hline \end{array}$$

Nico found 34 shells on Monday and 78 on Tuesday. Brian found 47 on Monday and 69 on Tuesday. Who found more shells? How many more? _____



Wednesday



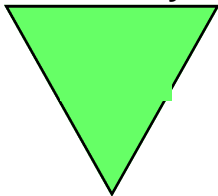
Wednesday

$$\begin{array}{r} 568 \\ + 123 \\ \hline \end{array} \quad \begin{array}{r} 735 \\ - 495 \\ \hline \end{array}$$

Sarah has a mixed bag of 350 red, blue and green paper stars. The label lists 120 blue and 115 green. How many stars are red? _____




Thursday




Thursday

$$\begin{array}{r} 626 \\ - 235 \\ \hline \end{array} \quad \begin{array}{r} 84 \\ + 16 \\ \hline \end{array}$$

There are 526 students in Baker School. If 452 students entered the poster contest for the fair, how many did not? _____



Friday



Friday

$$\begin{array}{r} 735 \\ - 495 \\ \hline \end{array} \quad \begin{array}{r} 15 \\ 33 \\ + 17 \\ \hline \end{array}$$

Write the missing numbers.

25, 30, 35, ____, ____, ____.

300, 400, 500, ____, ____, ____.

269, ____, 271.



Saturday



Summer Safety

Wearing a sunscreen to protect your skin is important during the hot summer months.



Journal Entries:



Week 5

Sports are fun. Many children participate in gymnastics, soccer, baseball, basketball, hockey, tennis, wrestling and lacrosse.

Tell about your favorite sport in 4 -5 sentences

Gold, silver, and bronze medals are awarded in the Olympic Games. Create a different award for your sport that could be presented to the winning team or athlete.

Draw Award

Book Corner:

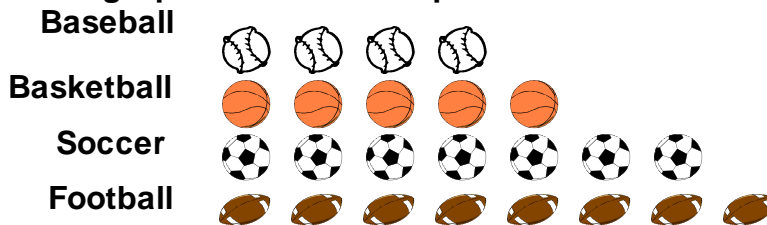
What book have you chosen for your second novel?

Title:

Author:


Challenge Corner:

Use the graph to answer the questions.




Each Ball = 2 people

- How many people play soccer? _____
- How many more people play football than baseball? _____
- How many people play sports in all? _____



Sunday




Fact
of the
Week



Many of you will be going to the shore this summer. Did you know that $\frac{3}{4}$ of the earth's surface is water?




Monday



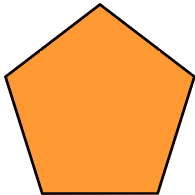
Monday

$$\begin{array}{r} 706 \\ - 242 \\ \hline \end{array} \quad \begin{array}{r} 156 \\ + 612 \\ \hline \end{array}$$

Andy's camping trip lasted 2 weeks. He spent \$3.80 for a sunscreen lotion and \$8.50 for a hat. How much did he spend in all?




Tuesday




Tuesday

$$\begin{array}{r} 101 \\ - 48 \\ \hline \end{array} \quad \begin{array}{r} 38 \\ + 35 \\ \hline \end{array}$$

Katie scored 78, 93 and 89 on her science tests. What is the total of her two highest scores?



Wednesday



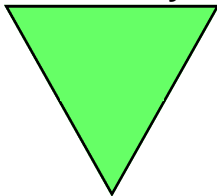
Wednesday

$$\begin{array}{r} 249 \\ + 125 \\ \hline \end{array} \quad \begin{array}{r} 304 \\ - 144 \\ \hline \end{array}$$

Make 3 equal groups. How many are in each group?




Thursday




Thursday

$$\begin{array}{r} 26 \\ 98 \\ + 19 \\ \hline \end{array} \quad \begin{array}{r} 704 \\ + 262 \\ \hline \end{array}$$

Jake has a half dollar and 3 dimes. How much money will be left if he buys a water ice for 69¢?



Friday




Friday

$$\begin{array}{r} 4 \\ \times 0 \\ \hline \end{array} \quad \begin{array}{r} 9 \\ \times 1 \\ \hline \end{array}$$

A tire bridge used 72 feet of chain. The suspension bridge used 260 feet of chain. How many more feet of chain did the suspension bridge use?



Saturday



Saturday

What Random-Act-of-Kindness were you involved in this week?



Journal Entries:



Week 6

Do you enjoy traveling by car? Some people say that getting there is half the fun. Yet getting there can also be tricky. Road signs can help you where you're going.

Draw some road signs you have seen. Tell what each means below each sign.

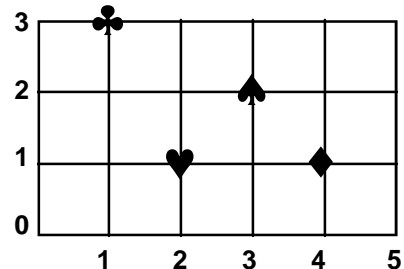
Book Corner:

Find two words new to you from your novel and look up their definitions.

What page are you on?

Challenge Corner:


Use the graph below to answer the question.



Start at 0. Go \rightarrow 3. Go \uparrow 2.
Where are you? Ring the picture.


August

Week 7



3rd Grade

Sunday



Fact of the Week



Oceans are salty because of dissolved salts from rocks in the oceans' beds and rivers that flow into them.




Monday



$$\begin{array}{r} 445 \\ - 180 \\ \hline \end{array} \quad \begin{array}{r} 370 \\ + 619 \\ \hline \end{array}$$

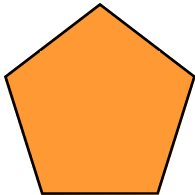
There are 5 cars. There are 3 clowns in each car. How many clowns are in the cars?



Monday

Tuesday

Tuesday




$$\begin{array}{r} 526 \\ - 235 \\ \hline \end{array} \quad \begin{array}{r} 493 \\ + 72 \\ \hline \end{array}$$

The first grade recycled 145 cans. Second grade recycled 216 cans. Third grade, 157 cans and Fourth grade 300. How many cans were recycled?




Wednesday

Wednesday



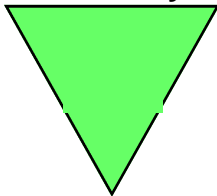
$$\begin{array}{r} 850 \\ - 233 \\ \hline \end{array} \quad \begin{array}{r} 148 \\ + 674 \\ \hline \end{array}$$

There are 3 red, 4 yellow, 1 black, and 9 green jelly beans in a brown paper bag. If you put your hand in without looking, what color would you likely pick out? Why?




Thursday

Thursday




$$\begin{array}{r} 4 \\ \times 2 \\ \hline \end{array} \quad \begin{array}{r} 5 \\ \times 4 \\ \hline \end{array}$$

Eric bought 4 tickets to the Phillies. Each ticket cost \$5. How much did he spend?



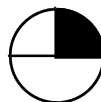
Friday

Friday



$$\begin{array}{r} 35 \\ 68 \\ + 21 \\ \hline \end{array} \quad \begin{array}{r} 147 \\ + 192 \\ \hline \end{array}$$

Ring the fraction that names the largest part



$\frac{1}{4}$



$\frac{2}{5}$



$\frac{3}{6}$




$\frac{4}{8}$



Saturday

Saturday




Summer Safety Tip

Remember never to swim alone. Always use the buddy system. Swim at guarded beaches and obey the lifeguards.



Journal Entries:



Week 7

Draw a picture of your favorite ocean animal.

Write 2 sentences describing the animal.

Write 2 more sentences telling why we should help keep our oceans clean.

A large, empty rectangular box with a black border, intended for a student to draw a picture of their favorite ocean animal.

Book Corner:

Write an original sentence for your 2 new words.


What page are you on now?

Challenge Corner:

Put a saucer of salt water out on a sunny window sill. What do you observe when the water has evaporated? What is left?


August

Week 8



3rd Grade

Sunday



Fact of the Week



All of the oceans of the world are connected to each other. Name them. There are four.



Monday


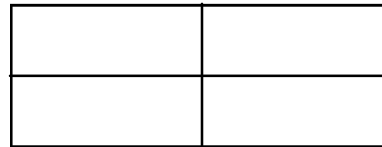


Monday

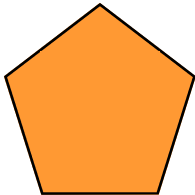
$$\begin{array}{r} 502 \\ - 289 \\ \hline \end{array}$$

$$\begin{array}{r} 160 \\ + 31 \\ \hline \end{array}$$

Color $\frac{3}{4}$ of this figure.



Tuesday



Tuesday


$$\begin{array}{r} 242 \\ 365 \\ + 152 \\ \hline \end{array}$$

$$\begin{array}{r} 314 \\ - 92 \\ \hline \end{array}$$

Jordan worked 15 minutes on Math, 10 minutes on Spelling, and 30 minutes on Reading. He started at 6:30. What time did she finish?



Wednesday



Wednesday

$$\begin{array}{r} 183 \\ + 173 \\ \hline \end{array}$$

$$\begin{array}{r} 413 \\ - 152 \\ \hline \end{array}$$

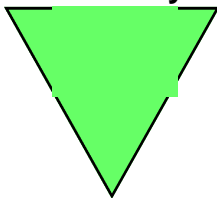
The cost of sunscreen is \$1.95. Sunglasses cost \$1.99 and swim trunks are on sale for \$5.90. About how much do all the items cost? Ring the answer.

\$9.00

\$10.00



Thursday




Thursday


$$\begin{array}{r} 305 \\ - 231 \\ \hline \end{array}$$

$$\begin{array}{r} 287 \\ + 299 \\ \hline \end{array}$$

There are 17 basketballs, 24 volleyballs, and 63 tennis balls. How many pieces of equipment in all?



Friday




Friday


$$\begin{array}{r} 496 \\ + 326 \\ \hline \end{array}$$

$$\begin{array}{r} 52 \\ - 33 \\ \hline \end{array}$$

Justin's family caught 63 bluefish. Megan's family caught 82 flounder. How many more fish did Megan's family catch?



Saturday




Saturday

What Random-Act-of-Kindness were you involved in this week?



Journal Entries:



Week 8

List 10 things to do instead of watching TV. Then rank your list from 1 to 10 with 1 being the thing you'd most like to do.

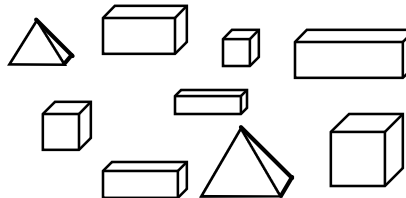
Book Corner:

Now that you've completed your second novel, turn to the activity page and respond to your book.

Challenge Corner:

Name the six geometric shapes along the left hand margin of the opposite page.

How many pyramids? _____



How many rectangles? _____

